

# Didaktický test 1

01

02

03

04

05

06 Uvedte postup řešení.

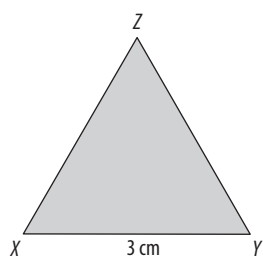
07 Uved'te postup řešení.

08 Uved'te postup řešení.


09

10 Uved'te postup řešení.


11



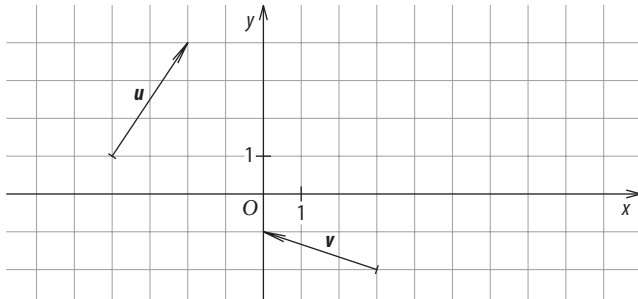
12



13




14 14.a



14.b

15



16

	A	B	C	D	E
	<input type="checkbox"/>	<input type="checkbox"/>	<input type="checkbox"/>	<input type="checkbox"/>	<input type="checkbox"/>

17 A N

17.1

17.2

17.3

17.4

18

	A	B	C	D	E
	<input type="checkbox"/>	<input type="checkbox"/>	<input type="checkbox"/>	<input type="checkbox"/>	<input type="checkbox"/>

19

	<input type="checkbox"/>	<input type="checkbox"/>	<input type="checkbox"/>	<input type="checkbox"/>	<input type="checkbox"/>
--	--------------------------	--------------------------	--------------------------	--------------------------	--------------------------

20

	<input type="checkbox"/>	<input type="checkbox"/>	<input type="checkbox"/>	<input type="checkbox"/>	<input type="checkbox"/>
--	--------------------------	--------------------------	--------------------------	--------------------------	--------------------------

21

	A	B	C	D	E	F
--	---	---	---	---	---	---

21.1

21.2

21.3

21.4

22

	A	B	C	D	E
	<input type="checkbox"/>	<input type="checkbox"/>	<input type="checkbox"/>	<input type="checkbox"/>	<input type="checkbox"/>

23

	<input type="checkbox"/>	<input type="checkbox"/>	<input type="checkbox"/>	<input type="checkbox"/>	<input type="checkbox"/>
--	--------------------------	--------------------------	--------------------------	--------------------------	--------------------------

24

	A	B	C	D	E
--	---	---	---	---	---

24.1

24.2

24.3

25

	A	B	C	D	E
	<input type="checkbox"/>	<input type="checkbox"/>	<input type="checkbox"/>	<input type="checkbox"/>	<input type="checkbox"/>

26

	<input type="checkbox"/>	<input type="checkbox"/>	<input type="checkbox"/>	<input type="checkbox"/>	<input type="checkbox"/>
--	--------------------------	--------------------------	--------------------------	--------------------------	--------------------------

01

02

03

04 Uvedte postup řešení.

05

06

07

08 Uvedte postup řešení.


09

10

11

12 Uvedte postup řešení.


13



14 Uvedte postup řešení.



15



**16**    A    N

16.1     

16.2     

16.3     

16.4     

          A    B    C    D    E

**17**              

**18**              

**19**              

**20**              

**21**              

**22**              

**23**              

**24**              

**25**    A    B    C    D    E    F

25.1                 

25.2                 

25.3                 

25.4                 

**26**    A    B    C    D    E

26.1              

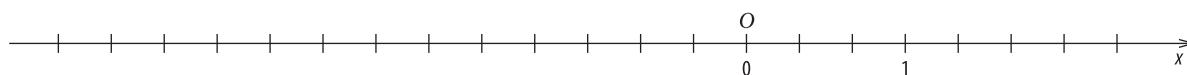
26.2              

26.3



01

02



03

04 Uvedte postup řešení.

05

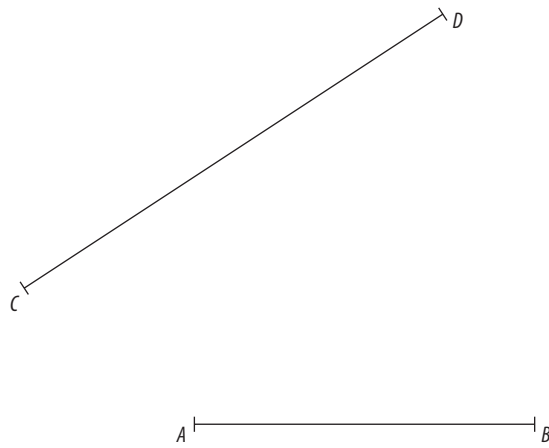
06 Uved'te postup řešení.

07

08 Uved'te postup řešení.

09

10



11

12

13

14 Uvedte postup řešení.

15 Uved'te postup řešení.

16 A N

16.1

16.2

16.3

16.4

A B C D E

17

18

19

20

21

22

23

24

25 A B C D E F

25.1

25.2

25.3

25.4

26 A B C D E

26.1

26.2

26.3