

1

2

3

4

5

6

7 7.1
Uvedte postup řešení.

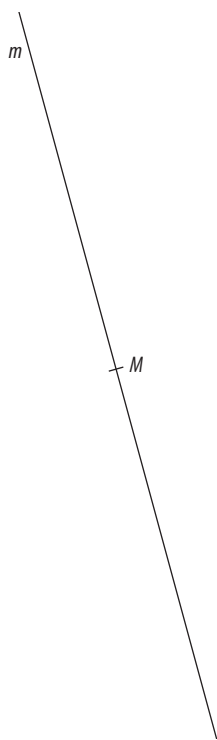
7.2

8

9

10

B
 \times



11 Uved'te postup řešení.

12 Uved'te postup řešení.

13

--

14

--

15

--

16 A N

16.1

16.2

16.3

16.4

A B C D E

17

18

19

20

21

22

23

24

25 A B C D E F

25.1

25.2

25.3

25.4

25 A B C D E

26.1

26.2

26.3

1



2

3

4

5 Uvedte postup řešení.

6

7 Uvedte postup řešení.

8

9 9.1

9.2

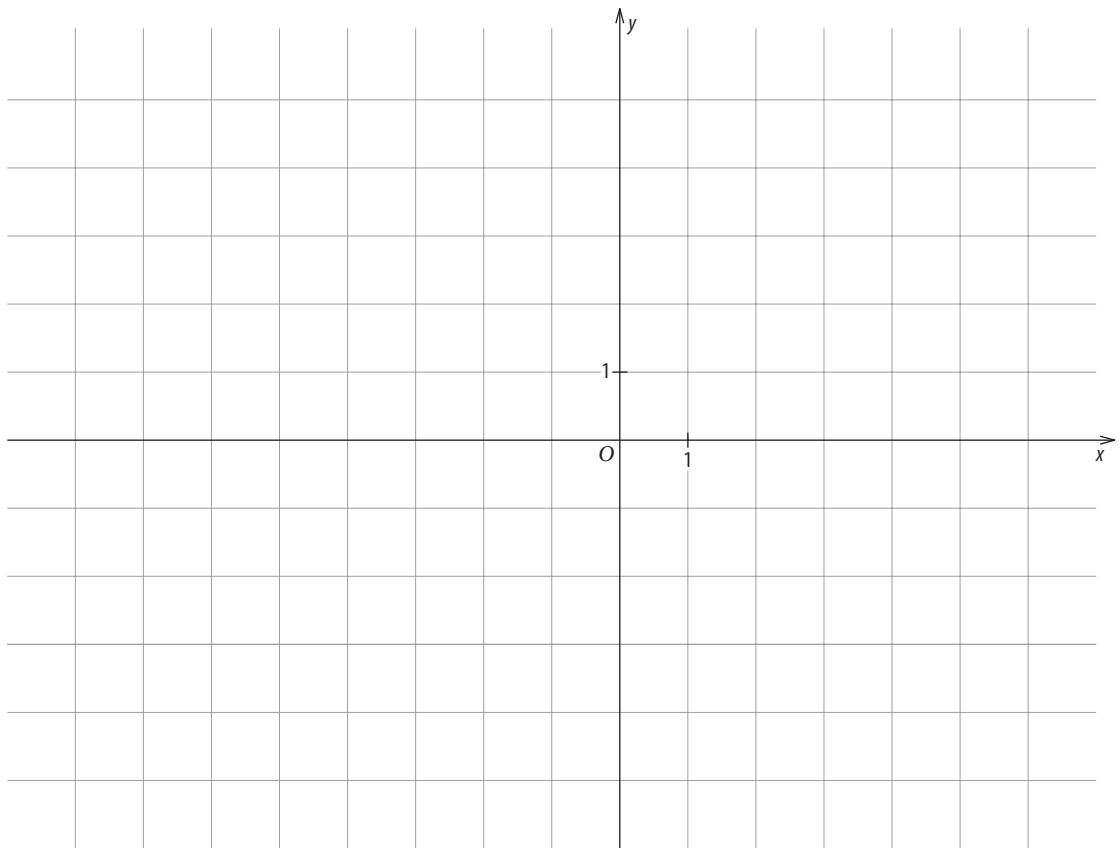
10

11 11.1


11.2

12 Uvedte postup řešení.


13



14



15



A B C D E

16

17 A N

17.1

17.2

17.3

17.4

A B C D E

18

19

20

21

22

A B C D E

23

24 A B C D E

24.1

24.2

24.3

A B C D E

25

26 A B C D E F

26.1

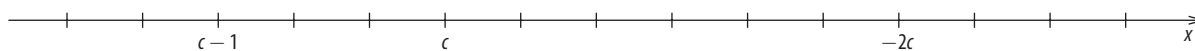
26.2

26.3

26.4

1

2



3 Uvedte postup řešení.

4

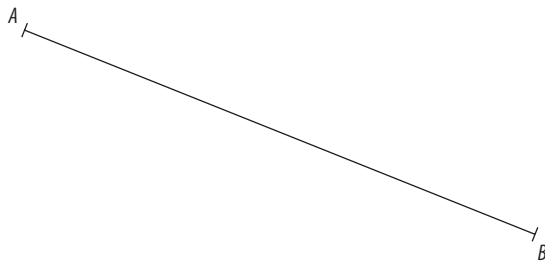
5 Uvedte postup řešení.

6

7

8

9



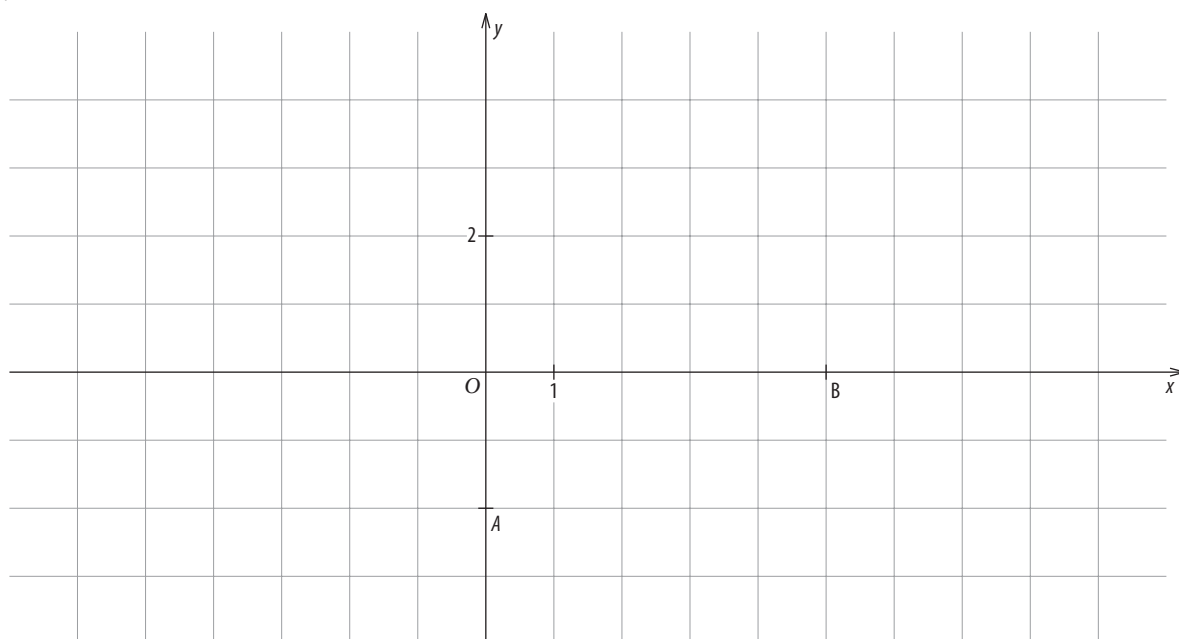
10

11 Uvedte postup řešení.

12 12.1

12.2

13 13.1



13.2

14 14.1

14.2

15 Uvedte postup řešení.

16 A N

16.1

16.2

16.3

16.4

A B C D E

17

18

19

20

21

22

23

24

25 A B C D E F

25.1

25.2

25.3

25.4

26 A B C D E

26.1

26.2

26.3

1

2

3

4

5

6 Uvedte postup řešení.

7 Uved'te postup řešení.

8 Uved'te postup řešení.

9

10

11 Uvedte postup řešení.

12

--

13

--

14

--

15

--

	A	B	C	D	E
16	<input type="checkbox"/>	<input type="checkbox"/>	<input type="checkbox"/>	<input type="checkbox"/>	<input type="checkbox"/>

17	<input type="checkbox"/>	<input type="checkbox"/>	<input type="checkbox"/>	<input type="checkbox"/>	<input type="checkbox"/>
----	--------------------------	--------------------------	--------------------------	--------------------------	--------------------------

18	<input type="checkbox"/>	<input type="checkbox"/>	<input type="checkbox"/>	<input type="checkbox"/>	<input type="checkbox"/>
----	--------------------------	--------------------------	--------------------------	--------------------------	--------------------------

19	<input type="checkbox"/>	<input type="checkbox"/>	<input type="checkbox"/>	<input type="checkbox"/>	<input type="checkbox"/>
----	--------------------------	--------------------------	--------------------------	--------------------------	--------------------------

20	<input type="checkbox"/>	<input type="checkbox"/>	<input type="checkbox"/>	<input type="checkbox"/>	<input type="checkbox"/>
----	--------------------------	--------------------------	--------------------------	--------------------------	--------------------------

21	<input type="checkbox"/>	<input type="checkbox"/>	<input type="checkbox"/>	<input type="checkbox"/>	<input type="checkbox"/>
----	--------------------------	--------------------------	--------------------------	--------------------------	--------------------------

22	<input type="checkbox"/>	<input type="checkbox"/>	<input type="checkbox"/>	<input type="checkbox"/>	<input type="checkbox"/>
----	--------------------------	--------------------------	--------------------------	--------------------------	--------------------------

	A	B	C	D	E
--	---	---	---	---	---

23.1	<input type="checkbox"/>	<input type="checkbox"/>	<input type="checkbox"/>	<input type="checkbox"/>	<input type="checkbox"/>
------	--------------------------	--------------------------	--------------------------	--------------------------	--------------------------

23.2	<input type="checkbox"/>	<input type="checkbox"/>	<input type="checkbox"/>	<input type="checkbox"/>	<input type="checkbox"/>
------	--------------------------	--------------------------	--------------------------	--------------------------	--------------------------

23.3	<input type="checkbox"/>	<input type="checkbox"/>	<input type="checkbox"/>	<input type="checkbox"/>	<input type="checkbox"/>
------	--------------------------	--------------------------	--------------------------	--------------------------	--------------------------

	A	N
24	<input type="checkbox"/>	<input type="checkbox"/>

24.1	<input type="checkbox"/>	<input type="checkbox"/>
------	--------------------------	--------------------------

24.2	<input type="checkbox"/>	<input type="checkbox"/>
------	--------------------------	--------------------------

24.3	<input type="checkbox"/>	<input type="checkbox"/>
------	--------------------------	--------------------------

24.4	<input type="checkbox"/>	<input type="checkbox"/>
------	--------------------------	--------------------------

	A	B	C	D	E
25	<input type="checkbox"/>	<input type="checkbox"/>	<input type="checkbox"/>	<input type="checkbox"/>	<input type="checkbox"/>

	A	B	C	D	E	F
--	---	---	---	---	---	---

26.1	<input type="checkbox"/>	<input type="checkbox"/>	<input type="checkbox"/>	<input type="checkbox"/>	<input type="checkbox"/>	<input type="checkbox"/>
------	--------------------------	--------------------------	--------------------------	--------------------------	--------------------------	--------------------------

26.2	<input type="checkbox"/>	<input type="checkbox"/>	<input type="checkbox"/>	<input type="checkbox"/>	<input type="checkbox"/>	<input type="checkbox"/>
------	--------------------------	--------------------------	--------------------------	--------------------------	--------------------------	--------------------------

26.3	<input type="checkbox"/>	<input type="checkbox"/>	<input type="checkbox"/>	<input type="checkbox"/>	<input type="checkbox"/>	<input type="checkbox"/>
------	--------------------------	--------------------------	--------------------------	--------------------------	--------------------------	--------------------------

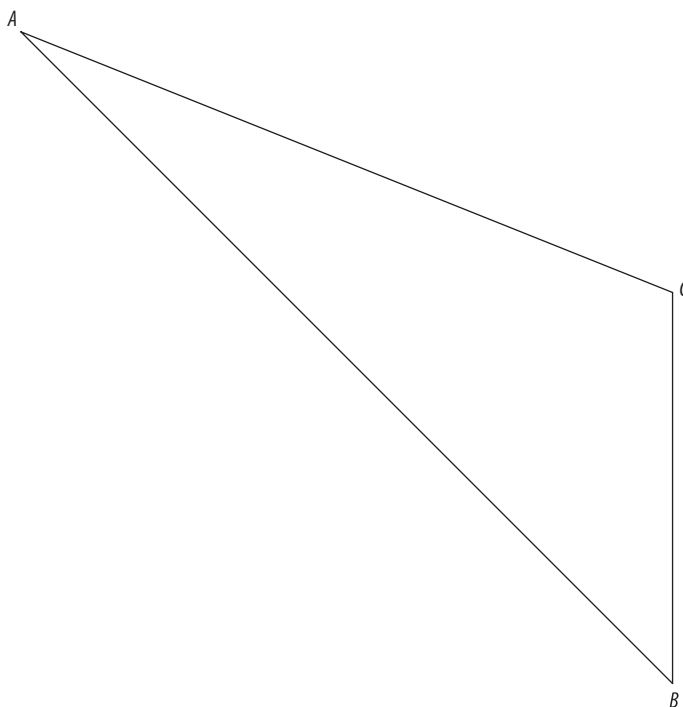
26.4	<input type="checkbox"/>	<input type="checkbox"/>	<input type="checkbox"/>	<input type="checkbox"/>	<input type="checkbox"/>	<input type="checkbox"/>
------	--------------------------	--------------------------	--------------------------	--------------------------	--------------------------	--------------------------

1

2

3

4



5 Uvedte postup řešení.

6 6.1

6.2

7 Uvedte postup řešení.

7.1

7.2

8

9

10

10.1

10.2

11

11.1

11.2

12

13

13.1

13.2

14 Uved'te postup řešení.

15

16 A N

16.1

16.2

16.3

16.4

A B C D E

17

18

19

20

21

22

23

24

25 A B C D E

25.1

25.2

25.3

26 A B C D E F

26.1

26.2

26.3

26.4